


1) Notiere die richtige Rechnung



$3 \cdot 4 = \underline{\quad}$



$\underline{\quad} \cdot \underline{\quad} = \underline{\quad}$



$\underline{\quad} \cdot \underline{\quad} = \underline{\quad}$



$\underline{\quad} \cdot \underline{\quad} = \underline{\quad}$



$\underline{\quad} \cdot \underline{\quad} = \underline{\quad}$



$\underline{\quad} \cdot \underline{\quad} = \underline{\quad}$

2) Notiere die Vierer-Reihe

4, 8, ...

3) Notiere die Sechser-Reihe

6, ...

4) Was ist an der Siebener-Reihe falsch?

7, 14, 21, 29, 35, 42, 50, 56, 63, 70


5) Fasse zusammen:




$$2 \cdot 3 + 1 \cdot 3 = 3 \cdot 3 = \underline{\quad}$$



$$\underline{\quad} \cdot \underline{\quad} + \underline{\quad} \cdot \underline{\quad} = \underline{\quad} \cdot \underline{\quad} = \underline{\quad}$$



$$\underline{\quad} \cdot \underline{\quad} + \underline{\quad} \cdot \underline{\quad} = \underline{\quad} \cdot \underline{\quad} = \underline{\quad}$$



$$\underline{\quad} \cdot \underline{\quad} + \underline{\quad} \cdot \underline{\quad} = \underline{\quad} \cdot \underline{\quad} = \underline{\quad}$$



$$\underline{\quad} \cdot \underline{\quad} + \underline{\quad} \cdot \underline{\quad} = \underline{\quad} \cdot \underline{\quad} = \underline{\quad}$$