



Bestimme die farbig dargestellten Bruchteile




$$= \frac{4}{10}$$




$$= \frac{4}{4}$$



$$= \frac{1}{2}$$



$$= \frac{3}{6}$$



$$= \frac{1}{4}$$



$$= \frac{2}{5}$$